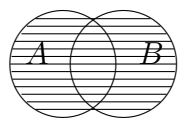
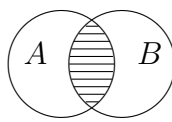


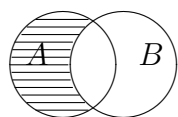
Następujące wykresy ilustrują działania na zdarzeniach:



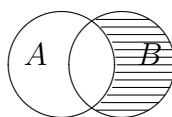
$$A \cup B$$



$$A \cap B$$



$$A \setminus B$$



$$B \setminus A$$